


World Maths Day


MARCH 26, 2025



Prep- Position

Can you put the birds into their nests?

- The blue bird's nest is the first in line.
- The red birds are next to each other.
- The green bird is between a red bird and a blue bird.



1/2 Balloons

I want to put 10 spots on my balloons.


- If I put 2 spots on the purple balloon, and twice as many spots on the green balloon, how many spots must I put on my orange balloon to have 10 spots altogether?



3/4 Bus Adventure

This bus is taking parents and children to the zoo.

- There are 47 people on the bus.
- There are 5 more children than parents on the bus.
- How many parents are on the bus?

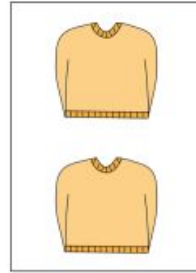


5/6 Tops & Jumpers Shopping

Use the information given to work out how much you would spend on one green top and one yellow jumper



= \$42.00



= \$90.00

How much will I pay for...



Challenge- Bright Beautiful Banners

A club is making a large, colourful banner to carry in a parade.

When you buy fabric, you specify the exact length of material you need. The table below shows information about the amount of fabric of each colour needed for the banner design.

1. How many metres of each colour fabric are needed to make the banner?
2. The fabric costs \$6 per metre. Determine the total cost of the fabric required to make the banner.

Colour	Amount of Fabric Needed
red	two times as much fabric as purple
orange	one half as much fabric as white
purple	one third as much fabric as orange
white	four times as much fabric as green
green	half a metre